








Riddle 50

What did the doctor tell the little monster?



Name the fraction that is shaded.
Then rename the fraction as a percent.
Solve the riddle using your answers below.

	Fraction	Percent
	$\frac{\quad}{\quad}$ T	$\frac{\quad}{\quad}$ Y
	$\frac{\quad}{\quad}$ S	$\frac{\quad}{\quad}$ U
	$\frac{\quad}{\quad}$ E	$\frac{\quad}{\quad}$ R
	$\frac{\quad}{\quad}$ O	$\frac{\quad}{\quad}$ A
	$\frac{\quad}{\quad}$ N	$\frac{\quad}{\quad}$ M
	$\frac{\quad}{\quad}$ G	$\frac{\quad}{\quad}$ D

Solve the Riddle!

Write the letter that goes with each answer.

$$50\% \quad \frac{1}{10} \quad 30\% \quad \frac{9}{10} \quad 70\% \quad 30\% \quad \frac{7}{10} \quad - \quad \frac{3}{10} \quad \frac{1}{10} \quad 60\% \quad \frac{7}{10} \quad !$$

Answer Key

Page 50: Riddle 45

"Bi-son!"

I-\$6.01, O-\$13.70, E-\$1.25, S-\$2.97, N-\$12.68,

B-\$7.25