

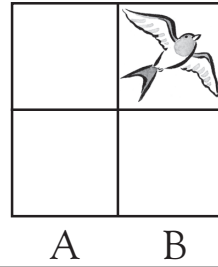


Location on a grid


Look at the grid and then answer the question.

Which box is the bird in?

B, 2



Look at the grid and then answer the questions below.



Write where each of the animals can be found.

mouse

elephant

horse

lion

zebra

tiger

cat

chicken

pig

cow

goat

whale

crab

butterfly

sheep

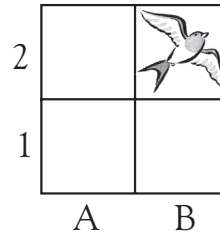


Location on a grid

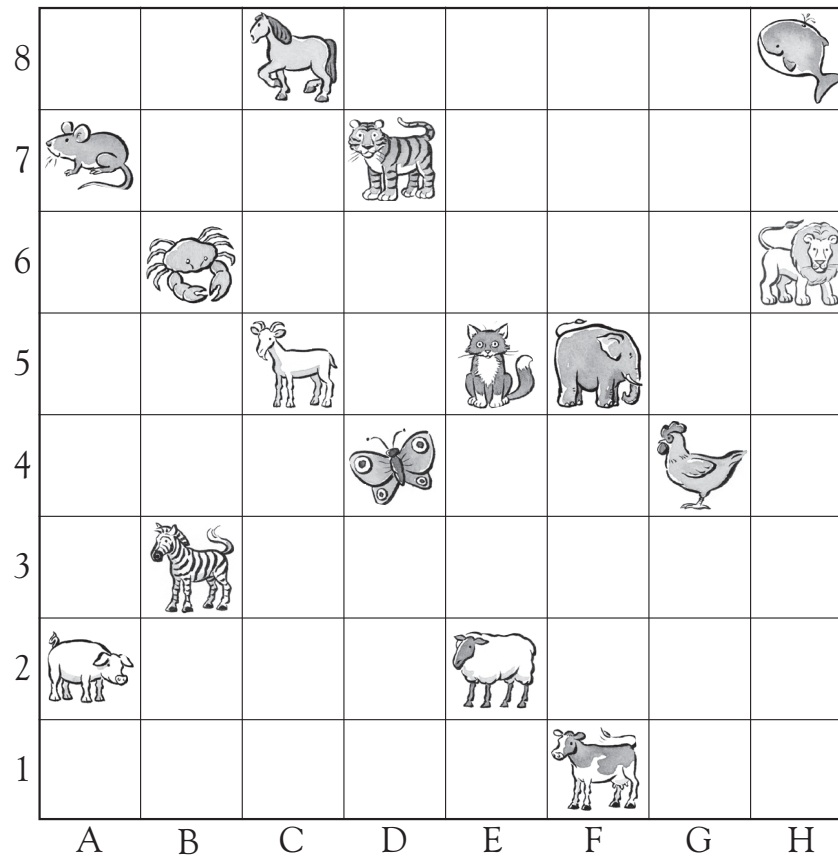
Look at the grid and then answer the question.

Which box is the bird in?

B, 2



Look at the grid and then answer the questions below.



Write where each of the animals can be found.

| | | | | | |
|-------|------|-----------|------|-------|------|
| mouse | A, 7 | elephant | F, 5 | horse | C, 8 |
| lion | H, 6 | zebra | B, 3 | tiger | D, 7 |
| cat | E, 5 | chicken | G, 4 | pig | A, 2 |
| cow | F, 1 | goat | C, 5 | whale | H, 8 |
| crab | B, 6 | butterfly | D, 4 | sheep | E, 2 |

To label the squares on the grid, children should understand that the letter should precede the number. This will prepare them to learn about coordinates on graphs where the value from the x-axis is written before the value from the y-axis.